
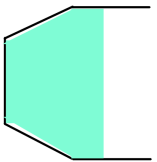

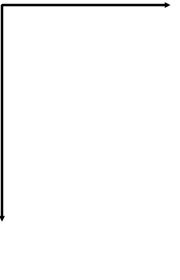


Name: \_\_\_\_\_

5-a-day


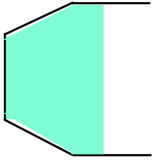

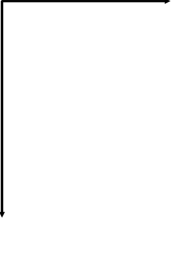
Foundation Plus

<p><b>26th August</b></p> <p>Factorise <math>x^2 + 9x + 20</math></p> <p style="text-align: right;">Corbettmaths</p>		
<p>Work out the sum of the interior angles for a 40 sided polygon.</p>		
<p>Water pours steadily into containers A and B. Both containers are empty before the water is poured in. Sketch graphs to show the depth of water over time.</p>		
 <p>A</p>	 <p>B</p>	
<p>Depth</p> 	<p>Depth</p> 	
<p>Which is smaller?</p> <p><math>(x + 3)^2</math> or <math>x^2 + 6x + 7</math></p>		

Name: \_\_\_\_\_

5-a-day

Foundation Plus

<p><b>26th August</b></p> <p>Factorise <math>x^2 + 9x + 20</math></p> <p style="text-align: right;">Corbettmaths</p>		
<p>Work out the sum of the interior angles for a 40 sided polygon.</p>		
<p>Water pours steadily into containers A and B. Both containers are empty before the water is poured in. Sketch graphs to show the depth of water over time.</p>		
 <p>A</p>	 <p>B</p>	
<p>Depth</p> 	<p>Depth</p> 	
<p>Which is smaller?</p> <p><math>(x + 3)^2</math> or <math>x^2 + 6x + 7</math></p>		