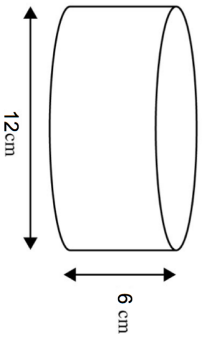
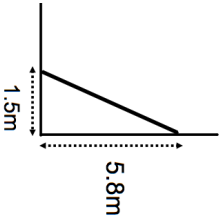
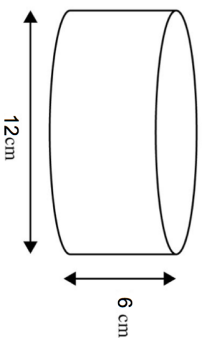
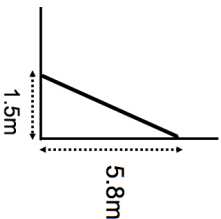


<p>7th August</p> 	<p>Corbettmaths</p> <p>Calculate the volume. Give your answer in terms of π</p>
<p>A light flashes every 50 seconds. A buzzer buzzes every 3 minutes. They both operate, how long until they both operate again?</p>	
<p>Calculate the density of a piece of wood with a mass of 80g and a volume of 90cm³</p>	
	<p>A ladder is placed against a wall. To be safe, it must be inclined at between 70° and 80° to the ground. Is the ladder safe?</p>
<p>Calculate the length of the ladder.</p>	

<p>7th August</p> 	<p>Corbettmaths</p> <p>Calculate the volume. Give your answer in terms of π</p>
<p>A light flashes every 50 seconds. A buzzer buzzes every 3 minutes. They both operate, how long until they both operate again?</p>	
<p>Calculate the density of a piece of wood with a mass of 80g and a volume of 90cm³</p>	
	<p>A ladder is placed against a wall. To be safe, it must be inclined at between 70° and 80° to the ground. Is the ladder safe?</p>
<p>Calculate the length of the ladder.</p>	