
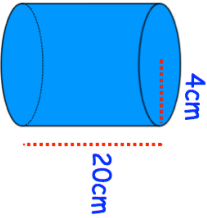

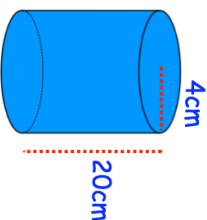


<b>24th August</b>		Corbettmaths 										
Write the mode of these numbers												
3 9 3 9 8 9 3 3												
Solve: $6x = 30$	Solve: $2x + 1 = 19$											
$\frac{3}{4} + \frac{1}{12}$												
<table border="1"> <thead> <tr> <th>Country</th> <th>Frequency</th> </tr> </thead> <tbody> <tr> <td>England</td> <td>5</td> </tr> <tr> <td>Ireland</td> <td>15</td> </tr> <tr> <td>Scotland</td> <td>10</td> </tr> <tr> <td>Wales</td> <td>6</td> </tr> </tbody> </table>	Country	Frequency	England	5	Ireland	15	Scotland	10	Wales	6	Ivan wants to draw a pie chart. Work out the size of each angle.	
Country	Frequency											
England	5											
Ireland	15											
Scotland	10											
Wales	6											
	Calculate the volume											

<b>24th August</b>		Corbettmaths 										
Write the mode of these numbers												
3 9 3 9 8 9 3 3												
Solve: $6x = 30$	Solve: $2x + 1 = 19$											
$\frac{3}{4} + \frac{1}{12}$												
<table border="1"> <thead> <tr> <th>Country</th> <th>Frequency</th> </tr> </thead> <tbody> <tr> <td>England</td> <td>5</td> </tr> <tr> <td>Ireland</td> <td>15</td> </tr> <tr> <td>Scotland</td> <td>10</td> </tr> <tr> <td>Wales</td> <td>6</td> </tr> </tbody> </table>	Country	Frequency	England	5	Ireland	15	Scotland	10	Wales	6	Ivan wants to draw a pie chart. Work out the size of each angle.	
Country	Frequency											
England	5											
Ireland	15											
Scotland	10											
Wales	6											
	Calculate the volume											