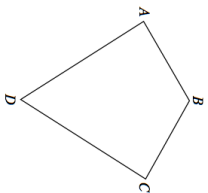
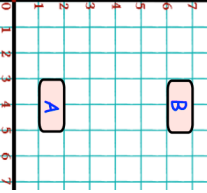
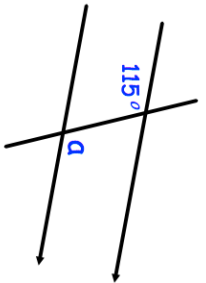
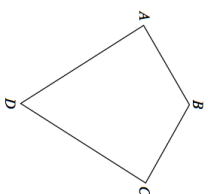
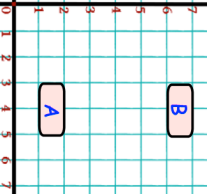
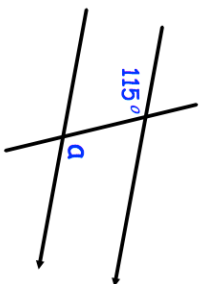


26th August	Corbettmaths
	<p>Is AB parallel to CD?</p> <p>Does Angle A = Angle C?</p>
<p>Convert 0.14 into a fraction in its simplest form.</p>	<p>Convert 80% into a fraction in its simplest form.</p>
<p>Martin and Laura share 415 sweets in the ratio 1:4.</p> <p>How many sweets does Laura receive?</p>	
	<p>B is a reflection of A.</p> <p>What is the equation of the mirror line?</p>
	<p>Size of a?</p> <p>Reason?</p>

26th August	Corbettmaths
	<p>Is AB parallel to CD?</p> <p>Does Angle A = Angle C?</p>
<p>Convert 0.14 into a fraction in its simplest form.</p>	<p>Convert 80% into a fraction in its simplest form.</p>
<p>Martin and Laura share 415 sweets in the ratio 1:4.</p> <p>How many sweets does Laura receive?</p>	
	<p>B is a reflection of A.</p> <p>What is the equation of the mirror line?</p>
	<p>Size of a?</p> <p>Reason?</p>