
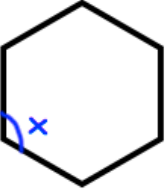

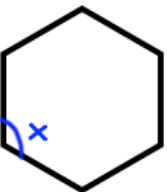


<p>28th August</p> <p>My number is 500 to the nearest 10, but is not 500</p> 	<p>Corbettmaths</p> <p>What could his number be?</p>																									
<p>Expand and simplify</p> $4(y + 3) - 3(y + 2)$																										
<p>Two spinners have the equal size sections with the numbers 1, 2, 3 and 4. They are spun and the two numbers are multiplied together.</p> <p>Complete the table to show all the possible totals.</p>	<table border="1" data-bbox="687 577 900 792"> <tr> <td></td> <td>1</td> <td>2</td> <td>3</td> <td>4</td> </tr> <tr> <td>1</td> <td></td> <td></td> <td></td> <td></td> </tr> <tr> <td>2</td> <td></td> <td></td> <td></td> <td></td> </tr> <tr> <td>3</td> <td></td> <td></td> <td></td> <td></td> </tr> <tr> <td>4</td> <td></td> <td></td> <td></td> <td></td> </tr> </table>		1	2	3	4	1					2					3					4				
	1	2	3	4																						
1																										
2																										
3																										
4																										
<p>What is the probability of the total being 2?</p>	<p>What is the probability of the total being under 6?</p>																									
	<p>What is the size of each interior angle in a regular hexagon</p>																									

<p>28th August</p> <p>My number is 500 to the nearest 10, but is not 500</p> 	<p>Corbettmaths</p> <p>What could his number be?</p>																									
<p>Expand and simplify</p> $4(y + 3) - 3(y + 2)$																										
<p>Two spinners have the equal size sections with the numbers 1, 2, 3 and 4. They are spun and the two numbers are multiplied together.</p> <p>Complete the table to show all the possible totals.</p>	<table border="1" data-bbox="687 1666 900 1881"> <tr> <td></td> <td>1</td> <td>2</td> <td>3</td> <td>4</td> </tr> <tr> <td>1</td> <td></td> <td></td> <td></td> <td></td> </tr> <tr> <td>2</td> <td></td> <td></td> <td></td> <td></td> </tr> <tr> <td>3</td> <td></td> <td></td> <td></td> <td></td> </tr> <tr> <td>4</td> <td></td> <td></td> <td></td> <td></td> </tr> </table>		1	2	3	4	1					2					3					4				
	1	2	3	4																						
1																										
2																										
3																										
4																										
<p>What is the probability of the total being 2?</p>	<p>What is the probability of the total being under 6?</p>																									
	<p>What is the size of each interior angle in a regular hexagon</p>																									