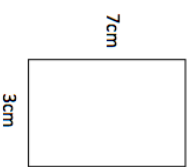


3rd August

The depth of a river is 160cm and each day it falls by 3cm.

After how many days will the depth of the river fall to 124cm?

Calculate the perimeter of the rectangle



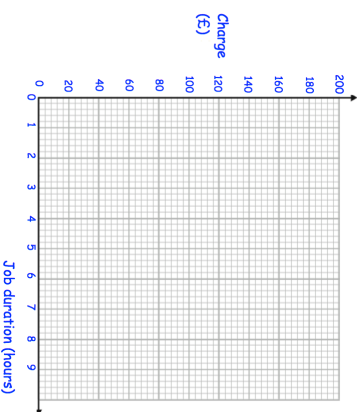
The rectangle is folded vertically.

Calculate the perimeter of the new rectangle

Plot the data on the scatter graph

Job duration (hours)	1	2	3	3	5	6	6
Change (£)	60	80	104	116	128	140	160

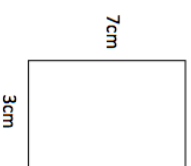
Describe the relationship between the job duration and the charge.

**3rd August**

The depth of a river is 160cm and each day it falls by 3cm.

After how many days will the depth of the river fall to 124cm?

Calculate the perimeter of the rectangle



The rectangle is folded vertically.

Calculate the perimeter of the new rectangle

Plot the data on the scatter graph

Job duration (hours)	1	2	3	3	5	6	6
Change (£)	60	80	104	116	128	140	160

Describe the relationship between the job duration and the charge.

