
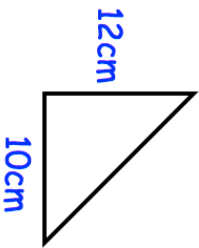


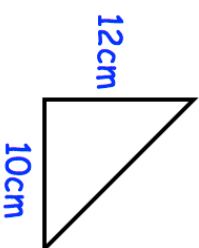



30th August	Corbettmaths 
	Find the area of this right angle triangle
<p>£1 = \$1.50</p> <p>Nicola changes £20 into dollars.</p> <p>How much will she get?</p>	
<p>What fraction is halfway between</p> <p><math>\frac{2}{5}</math> and <math>\frac{9}{10}</math></p>	
<p>£1 = €1.25</p>  <p>€50</p>	<p>This watch costs €50 in Lisbon. The same watch costs £35 in London. Which is cheaper?</p>
<p>500ml of shampoo costs 78p 1.25 litres of shampoo costs £2</p> <p>Which is better value?</p>	

30th August	Corbettmaths 
	Find the area of this right angle triangle
<p>£1 = \$1.50</p> <p>Nicola changes £20 into dollars.</p> <p>How much will she get?</p>	
<p>What fraction is halfway between</p> <p><math>\frac{2}{5}</math> and <math>\frac{9}{10}</math></p>	
<p>£1 = €1.25</p>  <p>€50</p>	<p>This watch costs €50 in Lisbon. The same watch costs £35 in London. Which is cheaper?</p>
<p>500ml of shampoo costs 78p 1.25 litres of shampoo costs £2</p> <p>Which is better value?</p>	