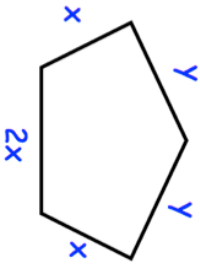
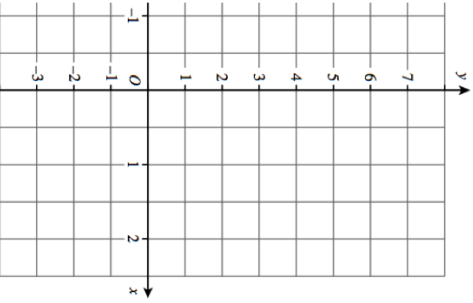
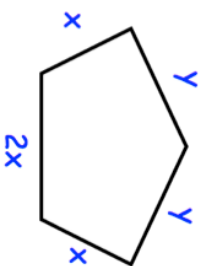
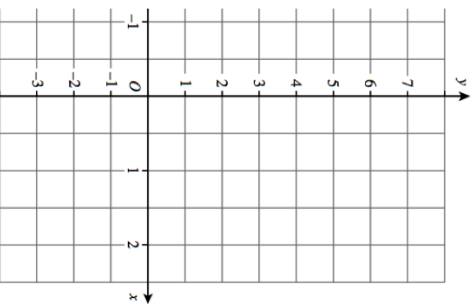


<p><b>4th August</b></p> 	<p>Corbettmaths</p> <p>Write an expression for the perimeter</p>										
<p>The median of five numbers is 7.</p> <p>Four of the numbers are 2, 7, 8 and 9.</p> <p>Write down a possible value of the fifth number.</p>											
<table border="1" data-bbox="821 147 901 551"> <tr> <td>x</td> <td>-1</td> <td>0</td> <td>1</td> <td>2</td> </tr> <tr> <td>y</td> <td></td> <td></td> <td></td> <td></td> </tr> </table> <p>Complete the table for <math>y = 3x + 1</math></p>	x	-1	0	1	2	y					
x	-1	0	1	2							
y											
<p>Draw the graph <math>y = 3x + 1</math> on the grid.</p>											
<p>Work out <math>3.4 \times 8.25</math></p>											

<p><b>4th August</b></p> 	<p>Corbettmaths</p> <p>Write an expression for the perimeter</p>										
<p>The median of five numbers is 7.</p> <p>Four of the numbers are 2, 7, 8 and 9.</p> <p>Write down a possible value of the fifth number.</p>											
<table border="1" data-bbox="821 1236 901 1641"> <tr> <td>x</td> <td>-1</td> <td>0</td> <td>1</td> <td>2</td> </tr> <tr> <td>y</td> <td></td> <td></td> <td></td> <td></td> </tr> </table> <p>Complete the table for <math>y = 3x + 1</math></p>	x	-1	0	1	2	y					
x	-1	0	1	2							
y											
<p>Draw the graph <math>y = 3x + 1</math> on the grid.</p>											
<p>Work out <math>3.4 \times 8.25</math></p>											