
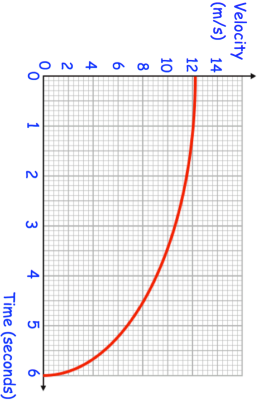

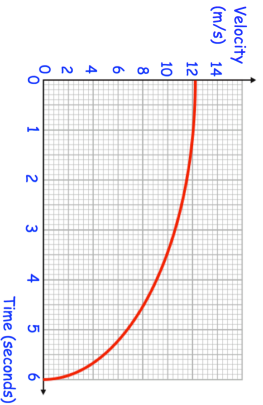


11th August		Corbettmaths 
	<p>Work out an estimate for the distance travelled over 6 seconds. Use 3 strips of equal width.</p>	
<p>Here is a velocity-time graph for 6 seconds of a journey.</p>		
<p>Make h the subject of</p> $\sqrt{\frac{r+h}{4rh}} = V$		
<p>Find the equation of the line that is perpendicular to $2x + 3y = 4$ and passes through the point (9, 0)</p>		
<p>Solve</p> $8^{4x+1} - 16^{x-1} = 0$		

11th August		Corbettmaths 
	<p>Work out an estimate for the distance travelled over 6 seconds. Use 3 strips of equal width.</p>	
<p>Here is a velocity-time graph for 6 seconds of a journey.</p>		
<p>Make h the subject of</p> $\sqrt{\frac{r+h}{4rh}} = V$		
<p>Find the equation of the line that is perpendicular to $2x + 3y = 4$ and passes through the point (9, 0)</p>		
<p>Solve</p> $8^{4x+1} - 16^{x-1} = 0$		