
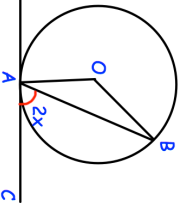
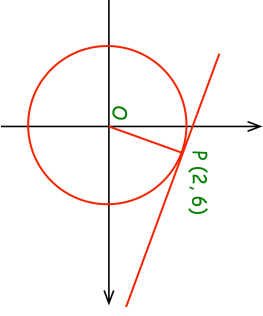

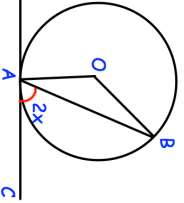
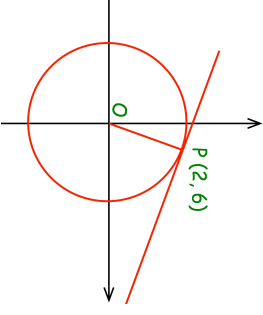


19th August Show using algebra $1.0\dot{2}\dot{4} = 1\frac{4}{165}$	 Corbettmaths
 <p>A and B are points on the circumference of a circle, centre O. CA is a tangent to the circle. Angle CAB = $2x$</p> <p>Prove that angle AOB = $4x$ Give reasons for each stage of your working.</p>	<p>Find the area of the circle</p>
 <p>The diagram shows the circle $x^2 + y^2 = 40$ with a tangent at the point (2, 6)</p>	<p>Find the equation of the tangent</p>

19th August Show using algebra $1.0\dot{2}\dot{4} = 1\frac{4}{165}$	 Corbettmaths
 <p>A and B are points on the circumference of a circle, centre O. CA is a tangent to the circle. Angle CAB = $2x$</p> <p>Prove that angle AOB = $4x$ Give reasons for each stage of your working.</p>	<p>Find the area of the circle</p>
 <p>The diagram shows the circle $x^2 + y^2 = 40$ with a tangent at the point (2, 6)</p>	<p>Find the equation of the tangent</p>