
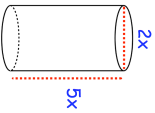
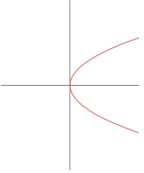
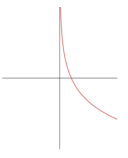
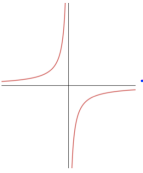
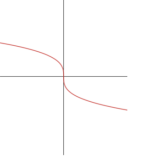

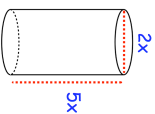
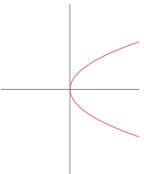
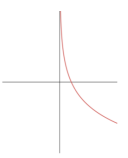
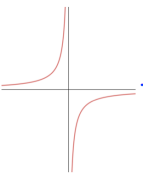
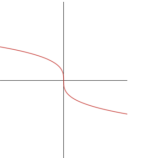


<b>20th August</b>	
<p>The cylinder has a surface area of <math>972\pi \text{ cm}^2</math>. Find <math>x</math>.</p>	
<p>Simplify fully</p> $\frac{x^3 - x}{x + 2} \div \frac{x^2 - x}{x^2 - 5x - 14}$	
$\frac{81^y}{3^{y-5}} = 3\sqrt{3}$ <p>Find <math>y</math></p>	
<p><b>Graph A</b></p>  <p><b>Graph B</b></p>  <p><b>Graph C</b></p>  <p><b>Graph D</b></p> 	<p><math>y = x^2</math> is graph <b>A</b></p> <p><math>y = x^3</math> is graph .....</p> <p><math>y = 2^x</math> is graph .....</p> <p><math>y = \frac{1}{x}</math> is graph .....</p>

<b>20th August</b>	
<p>The cylinder has a surface area of <math>972\pi \text{ cm}^2</math>. Find <math>x</math>.</p>	
<p>Simplify fully</p> $\frac{x^3 - x}{x + 2} \div \frac{x^2 - x}{x^2 - 5x - 14}$	
$\frac{81^y}{3^{y-5}} = 3\sqrt{3}$ <p>Find <math>y</math></p>	
<p><b>Graph A</b></p>  <p><b>Graph B</b></p>  <p><b>Graph C</b></p>  <p><b>Graph D</b></p> 	<p><math>y = x^2</math> is graph <b>A</b></p> <p><math>y = x^3</math> is graph .....</p> <p><math>y = 2^x</math> is graph .....</p> <p><math>y = \frac{1}{x}</math> is graph .....</p>