
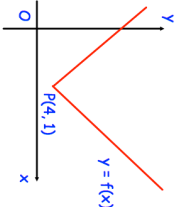
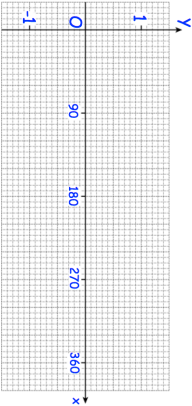

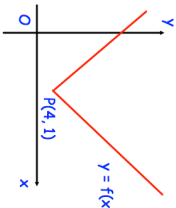
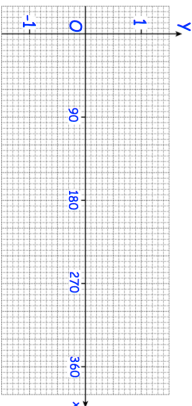


24th August	 Corbettmaths
Solve $x^2 - 8x + 15 \leq 0$	
	What are the coordinates of the new position of P when the graph $y = f(x)$ is transformed to the graph of $y = -f(x)$?
Sketch the graph of $y = \sin x$ for $0 \leq x \leq 360$.	
The cost of two TVs are in the ratio $x:y$ When both prices are increased by £40, the ratio is 13:20 When both prices are decreased by £100, the ratio is 8:15 Find the values of x and y	

24th August	 Corbettmaths
Solve $x^2 - 8x + 15 \leq 0$	
	What are the coordinates of the new position of P when the graph $y = f(x)$ is transformed to the graph of $y = -f(x)$?
Sketch the graph of $y = \sin x$ for $0 \leq x \leq 360$.	
The cost of two TVs are in the ratio $x:y$ When both prices are increased by £40, the ratio is 13:20 When both prices are decreased by £100, the ratio is 8:15 Find the values of x and y	