
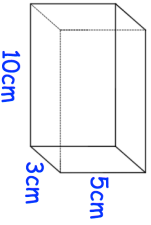
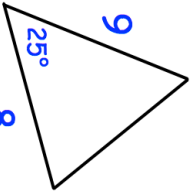
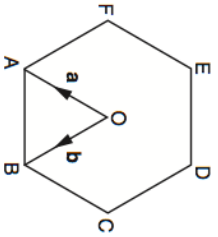


Name: _____

5-a-day


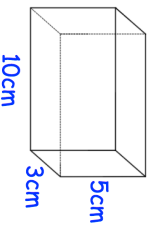
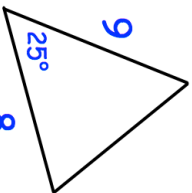
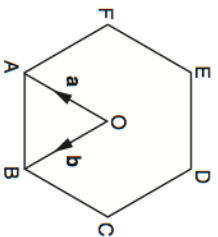
Higher

<p>1st August</p>	 <p>Corbettmaths</p>
<p>James is a student of a class of 29 students, 9 of which wear glasses. 1503 students attend the school. Use this information to estimate how many students in the school wear glasses.</p>	
<p>Simplify fully</p> $\frac{x^2 + 8x}{x^2 - 64}$	
<p>_____</p> <p>11.5cm</p>  <p>5cm 3cm 10cm</p>	<p>Is it possible to fit a thin, straight rod that is 11.5cm entirely inside the box?</p>
<p>9</p>  <p>25° 8</p>	<p>Find the area of the triangle.</p>
 <p>F E D C B A</p> <p>a b</p>	<p>Find in terms of a and b</p> <p>BA</p> <p>AE</p>

Name: _____

5-a-day

Higher

<p>1st August</p>	 <p>Corbettmaths</p>
<p>James is a student of a class of 29 students, 9 of which wear glasses. 1503 students attend the school. Use this information to estimate how many students in the school wear glasses.</p>	
<p>Simplify fully</p> $\frac{x^2 + 8x}{x^2 - 64}$	
<p>_____</p> <p>11.5cm</p>  <p>5cm 3cm 10cm</p>	<p>Is it possible to fit a thin, straight rod that is 11.5cm entirely inside the box?</p>
<p>9</p>  <p>25° 8</p>	<p>Find the area of the triangle.</p>
 <p>F E D C B A</p> <p>a b</p>	<p>Find in terms of a and b</p> <p>BA</p> <p>AE</p>