
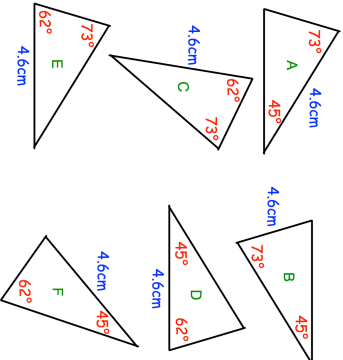

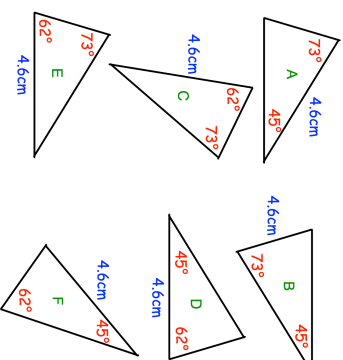


12th August  Corbettmaths	
At a football match, the ratio of women to men is 2:5. The ratio of women to children is 7:6. What percentage of the people at the football match are children?	
	Which triangles are congruent?
<input type="radio"/> A <input type="radio"/> A <input type="radio"/> A <input type="radio"/> C <input type="radio"/> C	What is the probability that both letters are different?
A counter is selected at random, the letter recorded and the counter put back into the bag. A second is then selected.	
Arrange in ascending order 938000 9.4×10^3 10×5^8	

12th August  Corbettmaths	
At a football match, the ratio of women to men is 2:5. The ratio of women to children is 7:6. What percentage of the people at the football match are children?	
	Which triangles are congruent?
<input type="radio"/> A <input type="radio"/> A <input type="radio"/> A <input type="radio"/> C <input type="radio"/> C	What is the probability that both letters are different?
A counter is selected at random, the letter recorded and the counter put back into the bag. A second is then selected.	
Arrange in ascending order 938000 9.4×10^3 10×5^8	