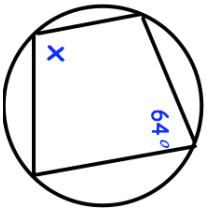
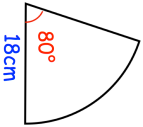
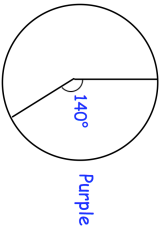
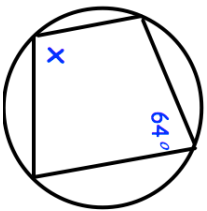
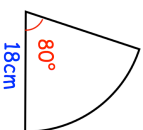
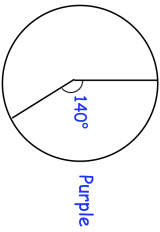


13th August		Corbettmaths										
<p>The LCM of two numbers is 352 The HCF of the numbers is 4. One of the numbers is 44. Find the other number.</p>												
	Find x											
<table border="1"> <thead> <tr> <th>Number of goals</th> <th>0</th> <th>1</th> <th>2</th> <th>3</th> </tr> </thead> <tbody> <tr> <td>Probability</td> <td>0.4</td> <td>0.3</td> <td>0.2</td> <td>0.1</td> </tr> </tbody> </table>	Number of goals	0	1	2	3	Probability	0.4	0.3	0.2	0.1	What is the probability David scores 5 or more goals in two consecutive games?	
Number of goals	0	1	2	3								
Probability	0.4	0.3	0.2	0.1								
<p>Calculate the perimeter of this sector, give your answer in terms of pi</p>												
<p>Yellow</p>  <p>Purple</p> <p>In an election there are two parties to vote for, the Yellow party or the Purple party.</p>	<p>6124 more people voted for the Yellow party than the Purple party. Work out the total number of voters</p>											

13th August		Corbettmaths										
<p>The LCM of two numbers is 352 The HCF of the numbers is 4. One of the numbers is 44. Find the other number.</p>												
	Find x											
<table border="1"> <thead> <tr> <th>Number of goals</th> <th>0</th> <th>1</th> <th>2</th> <th>3</th> </tr> </thead> <tbody> <tr> <td>Probability</td> <td>0.4</td> <td>0.3</td> <td>0.2</td> <td>0.1</td> </tr> </tbody> </table>	Number of goals	0	1	2	3	Probability	0.4	0.3	0.2	0.1	What is the probability David scores 5 or more goals in two consecutive games?	
Number of goals	0	1	2	3								
Probability	0.4	0.3	0.2	0.1								
<p>Calculate the perimeter of this sector, give your answer in terms of pi</p>												
<p>Yellow</p>  <p>Purple</p> <p>In an election there are two parties to vote for, the Yellow party or the Purple party.</p>	<p>6124 more people voted for the Yellow party than the Purple party. Work out the total number of voters</p>											