
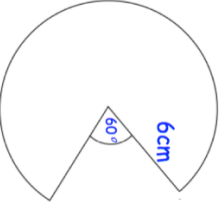

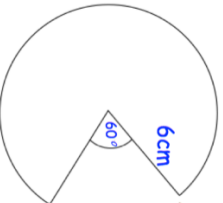


15th August		 Corbettmaths
Solve the simultaneous equations $6x + 4y = 3$ $2x - 3y = 14$		
Work out, giving your answer in standard form $(8.2 \times 10^6) - (3.51 \times 10^5)$		
Write as a fraction. 5^{-3}	Evaluate 25^0	
Simplify fully $\frac{4x^2 - 25}{6x^2 - 11x - 10}$		
	Calculate the perimeter of the sector.	

15th August		 Corbettmaths
Solve the simultaneous equations $6x + 4y = 3$ $2x - 3y = 14$		
Work out, giving your answer in standard form $(8.2 \times 10^6) - (3.51 \times 10^5)$		
Write as a fraction. 5^{-3}	Evaluate 25^0	
Simplify fully $\frac{4x^2 - 25}{6x^2 - 11x - 10}$		
	Calculate the perimeter of the sector.	