
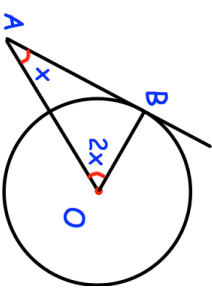
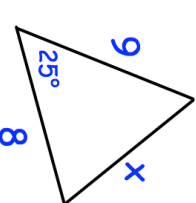

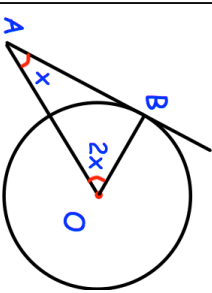
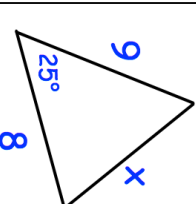


<b>2nd August</b>	Corbettmaths 
The width of a rectangle is 50cm, correct to 2 significant figures. The length of a rectangle is 115cm, correct to 3 significant figures.	Calculate the lower bound for the area of the rectangle.
What percentage of a distribution lies between the lowest value and the upper quartile?	
	Find x
The population of a country increases by $x\%$ each year. At the beginning of 2014 the population of the country was 24,000,000. At the beginning of 2017 the population was 26,996,736	Find the value of $x$
	Find the length of the side labelled $x$ .

<b>2nd August</b>	Corbettmaths 
The width of a rectangle is 50cm, correct to 2 significant figures. The length of a rectangle is 115cm, correct to 3 significant figures.	Calculate the lower bound for the area of the rectangle.
What percentage of a distribution lies between the lowest value and the upper quartile?	
	Find x
The population of a country increases by $x\%$ each year. At the beginning of 2014 the population of the country was 24,000,000. At the beginning of 2017 the population was 26,996,736	Find the value of $x$
	Find the length of the side labelled $x$ .