
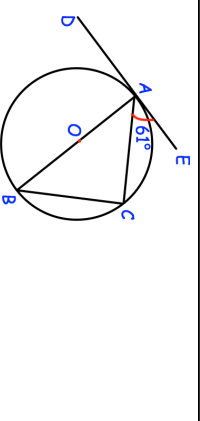



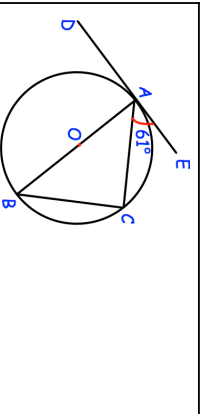




<p>20th August</p>	<p>Angle CAE is 61°.</p>	<p>Corbettmaths</p> 										
	<p>Find angle BAC. Find angle ABC.</p>											
<p>AB is the diameter. DE is a tangent at A.</p> <p>A region R satisfies the inequalities</p> $x + y \leq 5$ $x > 3$ $y \leq 1$ <p>Show this region on the grid.</p>												
<p>Make w the subject of</p> $8(w - 3a) = 3w + 7$												
<table border="1"> <tr> <td>Lowest</td> <td>68kg</td> </tr> <tr> <td>Lower Quartile</td> <td>74kg</td> </tr> <tr> <td>Median</td> <td>82kg</td> </tr> <tr> <td>Upper Quartile</td> <td>88kg</td> </tr> <tr> <td>Highest</td> <td>100kg</td> </tr> </table>	Lowest	68kg	Lower Quartile	74kg	Median	82kg	Upper Quartile	88kg	Highest	100kg	 <p>Draw a box plot to show this information</p>	
Lowest	68kg											
Lower Quartile	74kg											
Median	82kg											
Upper Quartile	88kg											
Highest	100kg											

<p>20th August</p>	<p>Angle CAE is 61°.</p>	<p>Corbettmaths</p> 										
	<p>Find angle BAC. Find angle ABC.</p>											
<p>AB is the diameter. DE is a tangent at A.</p> <p>A region R satisfies the inequalities</p> $x + y \leq 5$ $x > 3$ $y \leq 1$ <p>Show this region on the grid.</p>												
<p>Make w the subject of</p> $8(w - 3a) = 3w + 7$												
<table border="1"> <tr> <td>Lowest</td> <td>68kg</td> </tr> <tr> <td>Lower Quartile</td> <td>74kg</td> </tr> <tr> <td>Median</td> <td>82kg</td> </tr> <tr> <td>Upper Quartile</td> <td>88kg</td> </tr> <tr> <td>Highest</td> <td>100kg</td> </tr> </table>	Lowest	68kg	Lower Quartile	74kg	Median	82kg	Upper Quartile	88kg	Highest	100kg	 <p>Draw a box plot to show this information</p>	
Lowest	68kg											
Lower Quartile	74kg											
Median	82kg											
Upper Quartile	88kg											
Highest	100kg											