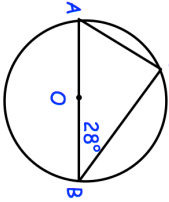
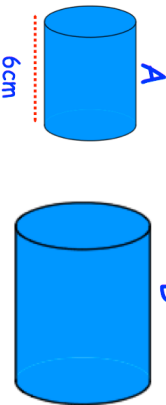
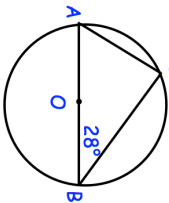
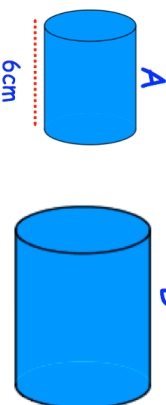


22nd August		Corbettmaths
 <p>AOB is the diameter of the circle.</p>	<p>Write down the size of angle ACB</p> <p>Find the size of angle BAC</p>	
 <p>A ball is dropped from h metres. After each bounce the ball reaches 60% of its previous height. After its third bounce it reaches a height of 0.648m. Find h</p>	<p>The surface area of A is 500cm² The surface area of B is 2000cm²</p> <p>The length A is 6cm. Find the length of B.</p>	
$(x + 4)^2 \equiv x^2 + 8x + 16$ $(x + 4)^2$ $(x + 4)^2 < 10$ $(x + 4)^2 = x - 3$	Circle the expression	
Factorise $2x^2 + 5x + 2$		

22nd August		Corbettmaths
 <p>AOB is the diameter of the circle.</p>	<p>Write down the size of angle ACB</p> <p>Find the size of angle BAC</p>	
 <p>A ball is dropped from h metres. After each bounce the ball reaches 60% of its previous height. After its third bounce it reaches a height of 0.648m. Find h</p>	<p>The surface area of A is 500cm² The surface area of B is 2000cm²</p> <p>The length A is 6cm. Find the length of B.</p>	
$(x + 4)^2 \equiv x^2 + 8x + 16$ $(x + 4)^2$ $(x + 4)^2 < 10$ $(x + 4)^2 = x - 3$	Circle the expression	
Factorise $2x^2 + 5x + 2$		