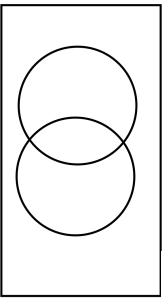
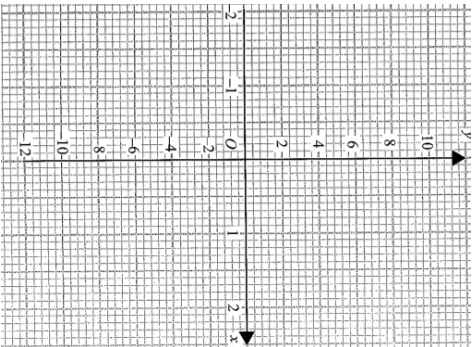
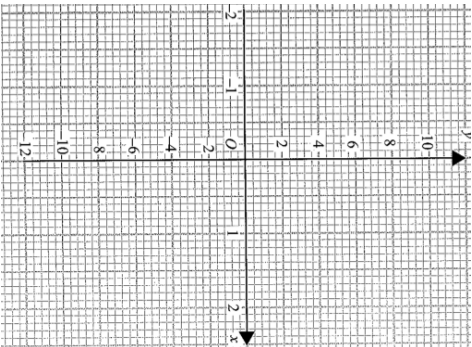
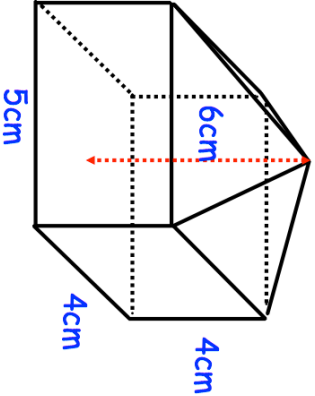
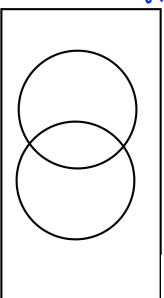
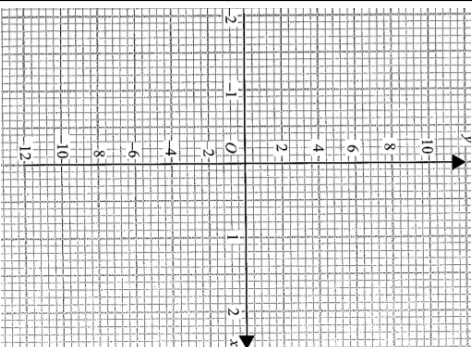
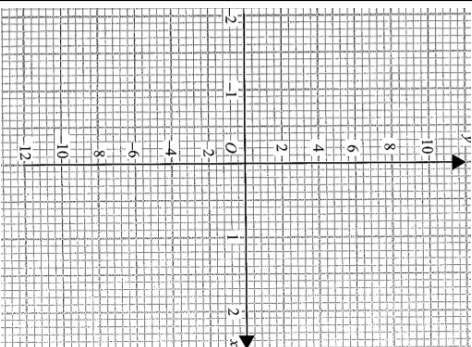
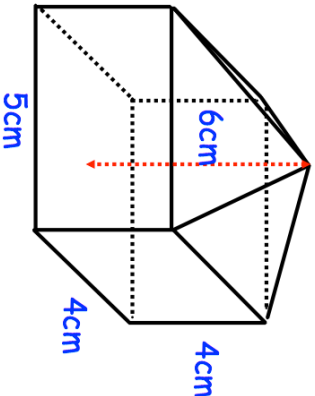


<p>27th August</p> <p>The students in a school sit two tests, a French test (F) and German test (G). Everyone passed at least one test. 68% passed the French test and 82% passed the German test.</p> <p>Show this information in the Venn diagram</p>	<p>Corbettmaths</p> 
<p>On the grid, draw $y = 2x^2 + x - 8$</p>	
<p>Using your graph, solve $2x^2 + x - 8 = -4$</p>	
	<p>Shown is a container made of a pyramid and a cuboid. 90cm^3 of water is poured into the container. How high above the base of the container will the water reach?</p>

<p>27th August</p> <p>The students in a school sit two tests, a French test (F) and German test (G). Everyone passed at least one test. 68% passed the French test and 82% passed the German test.</p> <p>Show this information in the Venn diagram</p>	<p>Corbettmaths</p> 
<p>On the grid, draw $y = 2x^2 + x - 8$</p>	
<p>Using your graph, solve $2x^2 + x - 8 = -4$</p>	
	<p>Shown is a container made of a pyramid and a cuboid. 90cm^3 of water is poured into the container. How high above the base of the container will the water reach?</p>