
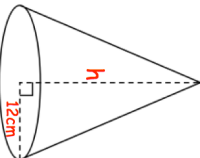
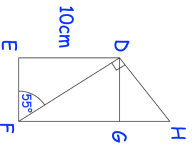
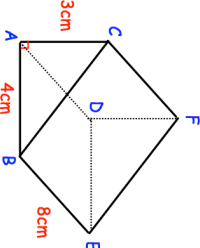

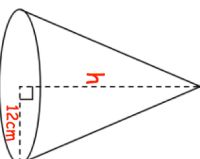
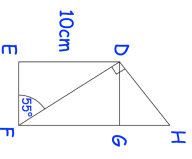
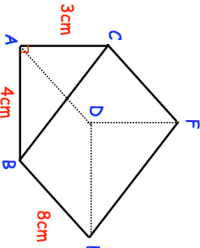


30th August	Corbettmaths 
$W = \frac{20(a+c)}{c}$ <p>Make c the subject.</p>	
 <p>The volume of the cone 500cm<sup>3</sup> Find h</p>	
<p>Solve, giving your answers to one decimal place.</p> $x^2 - x - 11 = 0$	
 <p>DE = 10cm Angle DFE = 55° Find the length of DH</p>	
 <p>Shown below is a triangular prism. Triangle ABC is a right angled triangle. Find the length of CE.</p>	

30th August	Corbettmaths 
$W = \frac{20(a+c)}{c}$ <p>Make c the subject.</p>	
 <p>The volume of the cone 500cm<sup>3</sup> Find h</p>	
<p>Solve, giving your answers to one decimal place.</p> $x^2 - x - 11 = 0$	
 <p>DE = 10cm Angle DFE = 55° Find the length of DH</p>	
 <p>Shown below is a triangular prism. Triangle ABC is a right angled triangle. Find the length of CE.</p>	