

Name: \_\_\_\_\_

5-a-day

Numeracy

13th August

Annie bought five DVDs at a cost of £10 each.

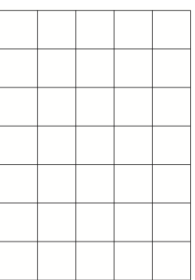
How much did Annie spend on the five DVDs?

She sold the DVDs for £68

How much profit did she make?



Corbettmaths



This is a centimetre grid.

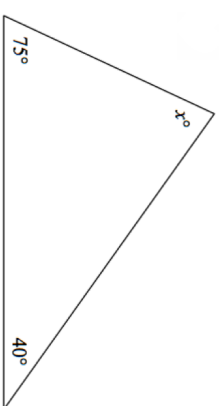
Draw a square with perimeter 12cm

A small bottle of fizzy drink contains 500ml

A large bottle contains 2 litres.

How much more does the large bottle contain?

Calculate x



Draw a shape with two lines of symmetry.

Name: \_\_\_\_\_

5-a-day

Numeracy

13th August

Annie bought five DVDs at a cost of £10 each.

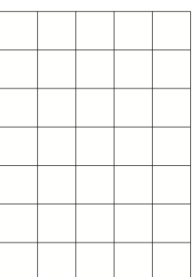
How much did Annie spend on the five DVDs?

She sold the DVDs for £68

How much profit did she make?



Corbettmaths



This is a centimetre grid.

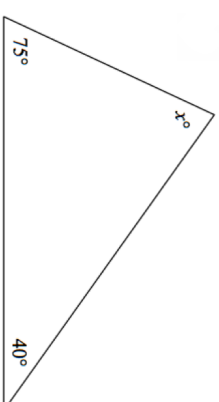
Draw a square with perimeter 12cm

A small bottle of fizzy drink contains 500ml

A large bottle contains 2 litres.

How much more does the large bottle contain?

Calculate x



Draw a shape with two lines of symmetry.