

Name: \_\_\_\_\_

5-a-day

Numeracy

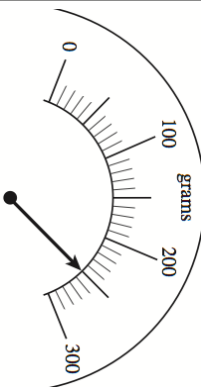


16th August

Guy needs 300g of sugar.

Corbettmaths

How much more sugar is needed?



Here is a list of 8 numbers.

- 15 16 18 19  
20 22 24 27

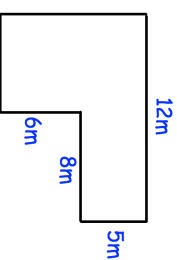
From the list, write down a prime number.

From the list, write down a factor of 32.

From the list, write down a multiple of 9, which is odd.

Find the product of 173 and 28

Find the perimeter of the shape shown.



Name: \_\_\_\_\_

5-a-day

Numeracy

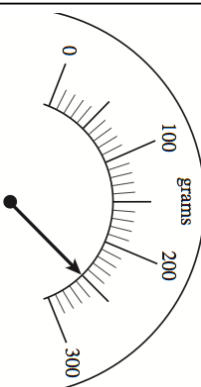


16th August

Guy needs 300g of sugar.

Corbettmaths

How much more sugar is needed?



Here is a list of 8 numbers.

- 15 16 18 19  
20 22 24 27

From the list, write down a prime number.

From the list, write down a factor of 32.

From the list, write down a multiple of 9, which is odd.

Find the product of 173 and 28

Find the perimeter of the shape shown.

