

Name: _____

5-a-day

Numeracy

20th August

Work out $45 + 20 + 15$

Corbettmaths

Work out $100 - 30 - 15$

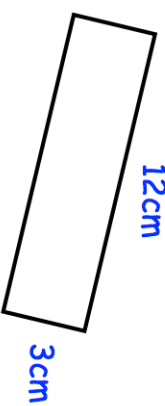

Round 348 to the nearest 10

Round 348 to the nearest 100

Cook for 15 minutes at 230°C
Reduce the oven temperature to 160°C .
Then cook for 40 minutes per kilogram.

How long does it take to cook a 7kg turkey?

On the grid, draw an isosceles triangle.



Work out the perimeter of the rectangle

Name: _____

5-a-day

Numeracy

20th August

Work out $45 + 20 + 15$

Corbettmaths

Work out $100 - 30 - 15$

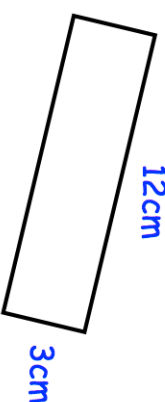

Round 348 to the nearest 10

Round 348 to the nearest 100

Cook for 15 minutes at 230°C
Reduce the oven temperature to 160°C .
Then cook for 40 minutes per kilogram.

How long does it take to cook a 7kg turkey?

On the grid, draw an isosceles triangle.



Work out the perimeter of the rectangle