

Name: \_\_\_\_\_

5-a-day

Numeracy

21st August

32

$\sqrt{64}$



What are the next 2 terms?

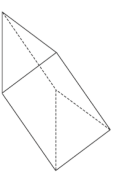
8 15 22 \_\_\_ \_\_\_

What are the next 2 terms?

7 6.5 6 5.5 \_\_\_ \_\_\_

Write one billion in figures.

The red line shows which part of a circle?



Shown is a triangular prism

Write down the number of faces

Write down the number of edges

Name: \_\_\_\_\_

5-a-day

Numeracy

21st August

32

$\sqrt{64}$



What are the next 2 terms?

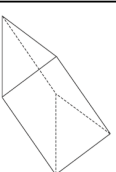
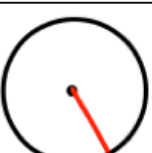
8 15 22 \_\_\_ \_\_\_

What are the next 2 terms?

7 6.5 6 5.5 \_\_\_ \_\_\_

Write one billion in figures.

The red line shows which part of a circle?



Shown is a triangular prism

Write down the number of faces

Write down the number of edges