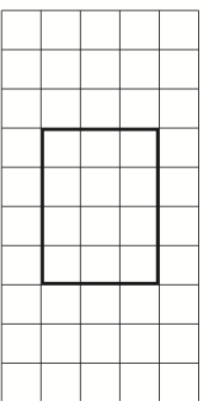


Name: _____

5-a-day

Numeracy

25th August



The rectangle is drawn on a centimetre grid.

What is it's area?

How many minutes are in half an hour?

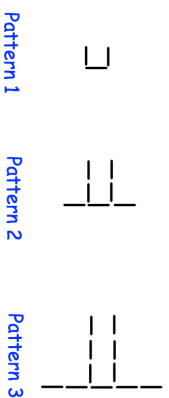
How many minutes are in two and a half hours?

$\frac{1}{2}$ of



= 60

Draw Pattern 4




Work out the number that is halfway between 125 and 275

Name: _____

5-a-day

Numeracy

25th August



The rectangle is drawn on a centimetre grid.

What is it's area?

How many minutes are in half an hour?

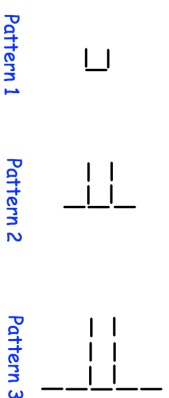
How many minutes are in two and a half hours?

$\frac{1}{2}$ of



= 60

Draw Pattern 4



Work out the number that is halfway between 125 and 275