

Name: _____

5-a-day

Numeracy

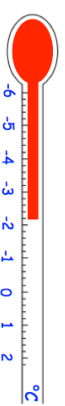
26th August

12 8 16 3 19 36

Write down one number from the list that is a multiple of 6

Write down the square numbers from the list

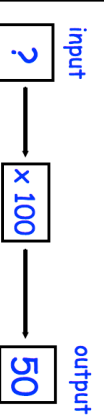
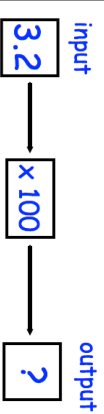
Corbettmaths



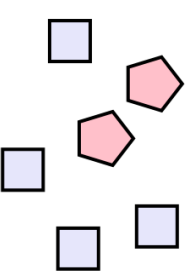
Write down the temperature on the thermometer.

The temperature falls by 3°C
Work out the new temperature.

Work out $6.8 - 1.47$



Write down the ratio of pentagons to squares.
Simplify your answer.



Name: _____

5-a-day

Numeracy

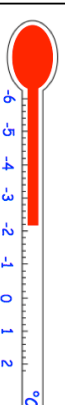
26th August

12 8 16 3 19 36

Write down one number from the list that is a multiple of 6

Write down the square numbers from the list

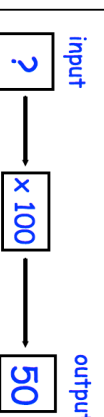
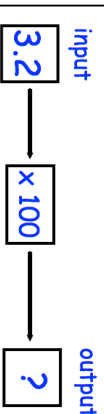
Corbettmaths



Write down the temperature on the thermometer.

The temperature falls by 3°C
Work out the new temperature.

Work out $6.8 - 1.47$



Write down the ratio of pentagons to squares.
Simplify your answer.

