





1st July	Corbettmaths 														
Solve the inequality $2(3x - 5) \geq 43$															
<p>Jennifer has 72 DVDs. This number of DVDs is 80% more than the number she had last month. How many DVDs did Jennifer have last month?</p>	Sketch $y = \frac{1}{x}$ where $x \neq 0$														
$y = \frac{1}{x}$ <p>Complete the table of values and draw a graph</p> <table border="1" data-bbox="295 136 411 562"> <tr> <td>x</td> <td>0.5</td> <td>1</td> <td>2</td> <td>3</td> <td>4</td> <td>5</td> </tr> <tr> <td>y</td> <td></td> <td></td> <td></td> <td></td> <td></td> <td></td> </tr> </table>	x	0.5	1	2	3	4	5	y							
x	0.5	1	2	3	4	5									
y															

1st July	Corbettmaths 														
Solve the inequality $2(3x - 5) \geq 43$															
<p>Jennifer has 72 DVDs. This number of DVDs is 80% more than the number she had last month. How many DVDs did Jennifer have last month?</p>	Sketch $y = \frac{1}{x}$ where $x \neq 0$														
$y = \frac{1}{x}$ <p>Complete the table of values and draw a graph</p> <table border="1" data-bbox="295 1227 411 1653"> <tr> <td>x</td> <td>0.5</td> <td>1</td> <td>2</td> <td>3</td> <td>4</td> <td>5</td> </tr> <tr> <td>y</td> <td></td> <td></td> <td></td> <td></td> <td></td> <td></td> </tr> </table>	x	0.5	1	2	3	4	5	y							
x	0.5	1	2	3	4	5									
y															