

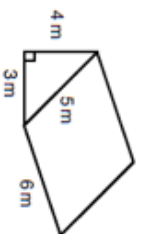
Name: _____

5-a-day

Foundation Plus



17th July

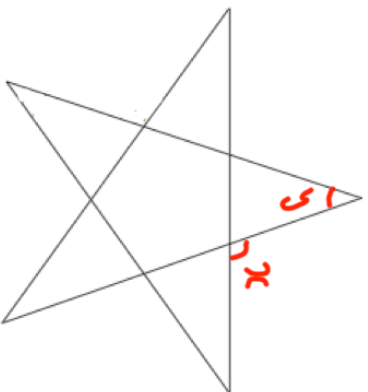


Calculate the surface area

Solve

$$x^2 - 2x - 24 = 0$$

Find x



Find y

A limited edition bag of flour contains 25% more than the standard bag.
The limited edition bag contains 650g of flour.
How much flour is in the standard bag?

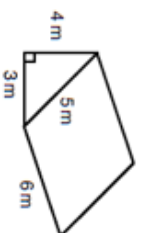
Name: _____

5-a-day

Foundation Plus



17th July

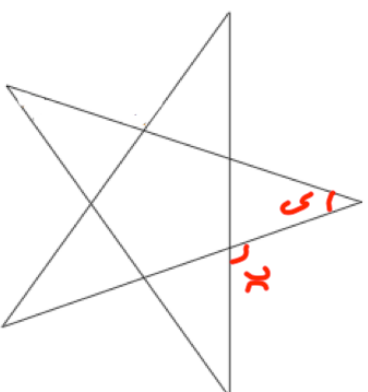


Calculate the surface area

Solve

$$x^2 - 2x - 24 = 0$$

Find x



Find y

A limited edition bag of flour contains 25% more than the standard bag.
The limited edition bag contains 650g of flour.
How much flour is in the standard bag?