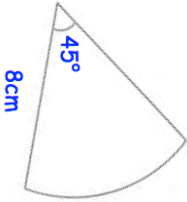
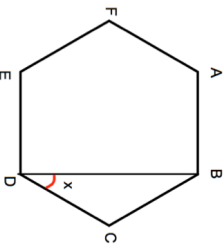

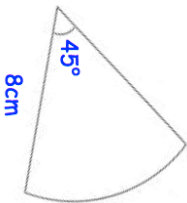
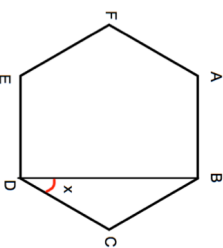


<p>20th July</p> <p>Find the area of the sector.</p> 	<p>Corbettmaths</p>
	<p>ABCDEF is regular hexagon. Find x.</p>
<p>Solve $3x^2 = 75$</p>	
<p>James has organised a game to raise money for charity at a local fair. He rolls a fair six sided dice and flips a fair coin. If the coin lands on heads, the number on the dice is squared. If the coin lands on tails, the number on the dice is cubed.</p> <p>Each person pays £1 to play. If they score above 30, they win £2 The game is played 800 times.</p> <p>How much money should James raise for charity?</p>	

<p>20th July</p> <p>Find the area of the sector.</p> 	<p>Corbettmaths</p>
	<p>ABCDEF is regular hexagon. Find x.</p>
<p>Solve $3x^2 = 75$</p>	
<p>James has organised a game to raise money for charity at a local fair. He rolls a fair six sided dice and flips a fair coin. If the coin lands on heads, the number on the dice is squared. If the coin lands on tails, the number on the dice is cubed.</p> <p>Each person pays £1 to play. If they score above 30, they win £2 The game is played 800 times.</p> <p>How much money should James raise for charity?</p>	