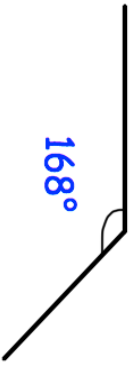

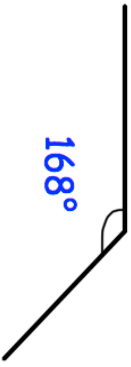
 Corbettmaths	
29th July	
<p>A rugby club, R, has bearing of 110° from town A. The rugby club, R, has bearing 245° from town B. Mark the position of the rugby club with a cross (x) and label it R.</p>	
<p>The mass of an object is measured at 7g to the nearest gram.</p>	<p>Complete the following statement to show the range of possible values of m.</p> <p>..... $\leq m <$</p>
<p>It takes 9 hours for 40 workers to seed 80 acres. How long would it take 15 people to seed 30 acres?</p>	
	<p>How many sides does it have?</p>
<p>Shown is one angle from a regular polygon.</p>	

 Corbettmaths	
29th July	
<p>A rugby club, R, has bearing of 110° from town A. The rugby club, R, has bearing 245° from town B. Mark the position of the rugby club with a cross (x) and label it R.</p>	
<p>The mass of an object is measured at 7g to the nearest gram.</p>	<p>Complete the following statement to show the range of possible values of m.</p> <p>..... $\leq m <$</p>
<p>It takes 9 hours for 40 workers to seed 80 acres. How long would it take 15 people to seed 30 acres?</p>	
	<p>How many sides does it have?</p>
<p>Shown is one angle from a regular polygon.</p>	