
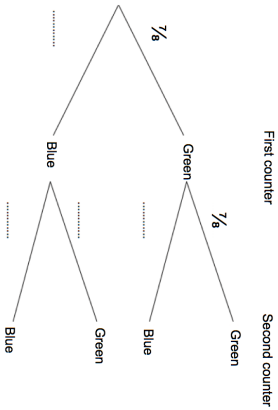


Name: _____

5-a-day


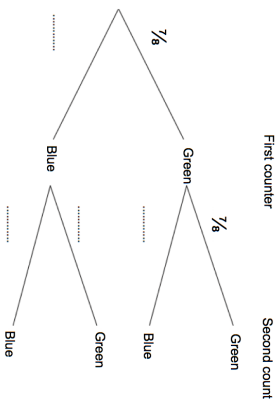
Foundation Plus

<p>31st July</p>	 Corbettmaths
<p>Solve</p> <p>$3(x + 8) = x + 6$</p>	
<p>First counter</p> <p>Second counter</p>  <p>There are green and blue counters in a container. Kevin takes at random a counter from the container. He replaces the counter in the container. Kevin takes at random a second counter from the container.</p>	<p>Complete the probability tree diagram.</p> <p>Work out the probability that Kevin picks counters that are different colour.</p>
<p>Solve $2x - 9 < 4$</p>	<p>If x is a positive integer, write down all the values of x which satisfies $2x - 9 < 4$.</p>
<p>In a sale, all holidays are reduced by 15%. If a holiday in the sale costs £697, what was the normal price of the holiday?</p>	

Name: _____

5-a-day

Foundation Plus

<p>31st July</p>	 Corbettmaths
<p>Solve</p> <p>$3(x + 8) = x + 6$</p>	
<p>First counter</p> <p>Second counter</p>  <p>There are green and blue counters in a container. Kevin takes at random a counter from the container. He replaces the counter in the container. Kevin takes at random a second counter from the container.</p>	<p>Complete the probability tree diagram.</p> <p>Work out the probability that Kevin picks counters that are different colour.</p>
<p>Solve $2x - 9 < 4$</p>	<p>If x is a positive integer, write down all the values of x which satisfies $2x - 9 < 4$.</p>
<p>In a sale, all holidays are reduced by 15%. If a holiday in the sale costs £697, what was the normal price of the holiday?</p>	