
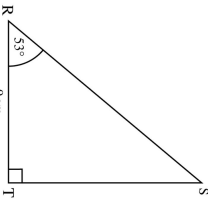

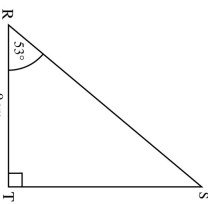


4th July A can of paint covers $6\frac{5}{8}$ m ² Jenny wants to paint an area of 50 m ² . How many cans of paint does she need? Solve $x^2 + 5x + 4 = 0$	 Corbettmaths												
<table border="1"> <thead> <tr> <th>Goals</th> <th>Number of matches</th> </tr> </thead> <tbody> <tr><td>0</td><td>3</td></tr> <tr><td>1</td><td>5</td></tr> <tr><td>2</td><td>9</td></tr> <tr><td>3</td><td>1</td></tr> <tr><td>4</td><td>2</td></tr> </tbody> </table>	Goals	Number of matches	0	3	1	5	2	9	3	1	4	2	Calculate the mean number of goals per match.
Goals	Number of matches												
0	3												
1	5												
2	9												
3	1												
4	2												
	Calculate the length of the line ST												
The Highest Common Factor (HCF) of two numbers is 6. The Lowest Common Multiple (LCM) of the same numbers is 60. What are the two numbers?													

4th July A can of paint covers $6\frac{5}{8}$ m ² Jenny wants to paint an area of 50 m ² . How many cans of paint does she need? Solve $x^2 + 5x + 4 = 0$	 Corbettmaths												
<table border="1"> <thead> <tr> <th>Goals</th> <th>Number of matches</th> </tr> </thead> <tbody> <tr><td>0</td><td>3</td></tr> <tr><td>1</td><td>5</td></tr> <tr><td>2</td><td>9</td></tr> <tr><td>3</td><td>1</td></tr> <tr><td>4</td><td>2</td></tr> </tbody> </table>	Goals	Number of matches	0	3	1	5	2	9	3	1	4	2	Calculate the mean number of goals per match.
Goals	Number of matches												
0	3												
1	5												
2	9												
3	1												
4	2												
	Calculate the length of the line ST												
The Highest Common Factor (HCF) of two numbers is 6. The Lowest Common Multiple (LCM) of the same numbers is 60. What are the two numbers?													