

Name: _____

5-a-day

Foundation

17th July



Corbettmaths

A shopkeeper buys a box of 10 pens for £4.

He sells them for 65p each.

What is his profit?

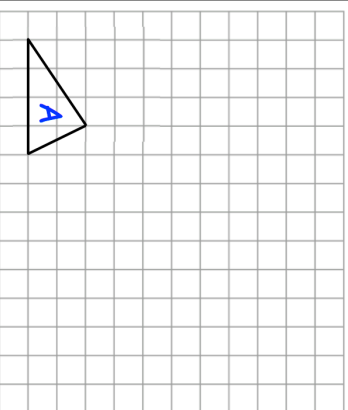
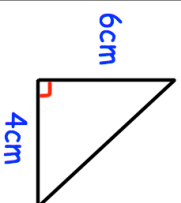
5 8 5 12

Calculate the mean

Calculate the range

Calculate the mode

Calculate the area of this triangle



On the grid, draw an enlargement of triangle A using scale factor 2.

Name: _____

5-a-day

Foundation

17th July



Corbettmaths

A shopkeeper buys a box of 10 pens for £4.

He sells them for 65p each.

What is his profit?

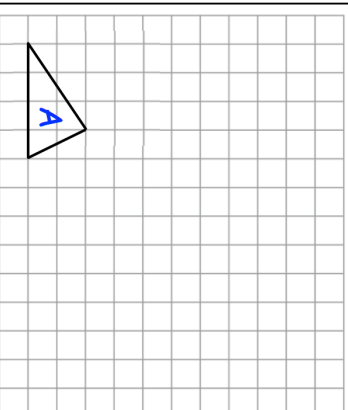
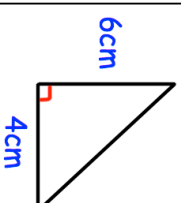
5 8 5 12

Calculate the mean

Calculate the range

Calculate the mode

Calculate the area of this triangle



On the grid, draw an enlargement of triangle A using scale factor 2.