

Name: _____

5-a-day

Foundation



Corbettmaths

21st July

Hannah earns £400 a week

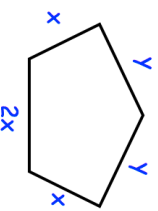
She is given a 20% pay rise.

What is her new wage?

Chloe has a ribbon 8 metres long.

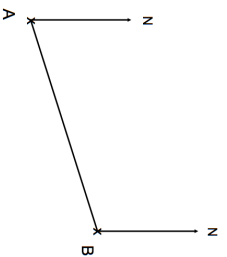
She cuts two pieces from the ribbon.
The first piece was 1.28 metres long.
The second piece was 0.65 metres long.

How much ribbon is left?



Find an expression for the perimeter of the pentagon.

Measure the bearing of B from A.



Factorise

$$w^2 - 5w$$

Name: _____

5-a-day

Foundation



Corbettmaths

21st July

Hannah earns £400 a week

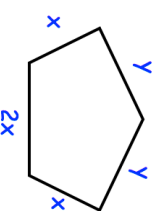
She is given a 20% pay rise.

What is her new wage?

Chloe has a ribbon 8 metres long.

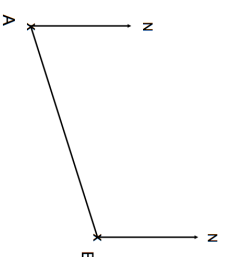
She cuts two pieces from the ribbon.
The first piece was 1.28 metres long.
The second piece was 0.65 metres long.

How much ribbon is left?



Find an expression for the perimeter of the pentagon.

Measure the bearing of B from A.



Factorise

$$w^2 - 5w$$