



Name: \_\_\_\_\_

5-a-day



Foundation

<p>22nd July</p> <p>5cm</p>  <p>3cm</p>	<p>Corbettmaths</p>  <p>Sketch a triangle with the same area as this rectangle.</p>										
<p>Write 24 as a product of primes</p>	<table border="1"><thead><tr><th>Shape</th><th>A</th><th>B</th><th>C</th><th>D</th></tr></thead><tbody><tr><td>Order of rotational symmetry</td><td></td><td></td><td></td><td></td></tr></tbody></table> <p>Write 240 as a product of primes</p>	Shape	A	B	C	D	Order of rotational symmetry				
Shape	A	B	C	D							
Order of rotational symmetry											
<p>Sarah makes cupcakes.</p> <p>She makes 16 cupcakes per hour.</p> <p>She makes cupcakes for <math>3\frac{1}{4}</math> hours each day, for 5 days of the week.</p> <p>The cupcakes are packed into boxes that hold 6 cupcakes.</p> <p>How many boxes are needed to hold all the cupcakes Sarah has made in 5 days?</p>											

Name: \_\_\_\_\_

5-a-day

Foundation

<p>22nd July</p> <p>5cm</p>  <p>3cm</p>	<p>Corbettmaths</p>  <p>Sketch a triangle with the same area as this rectangle.</p>										
<p>Write 24 as a product of primes</p>	<table border="1"><thead><tr><th>Shape</th><th>A</th><th>B</th><th>C</th><th>D</th></tr></thead><tbody><tr><td>Order of rotational symmetry</td><td></td><td></td><td></td><td></td></tr></tbody></table> <p>Write 240 as a product of primes</p>	Shape	A	B	C	D	Order of rotational symmetry				
Shape	A	B	C	D							
Order of rotational symmetry											
<p>Sarah makes cupcakes.</p> <p>She makes 16 cupcakes per hour.</p> <p>She makes cupcakes for <math>3\frac{1}{4}</math> hours each day, for 5 days of the week.</p> <p>The cupcakes are packed into boxes that hold 6 cupcakes.</p> <p>How many boxes are needed to hold all the cupcakes Sarah has made in 5 days?</p>											