

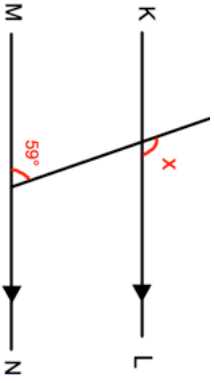


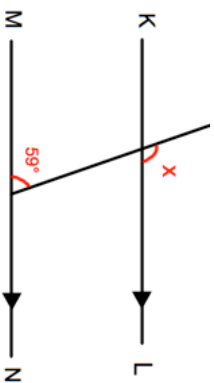


23rd July	 Corbettmaths
<div style="border: 1px solid black; border-radius: 50%; padding: 10px; display: inline-block;"> 0.64 is less than $\frac{13}{20}$ </div>  <p>Is Sophia correct? Explain your answer.</p>	
<p>Work out</p> $0.447 \div 3$	<p>Work out</p> 0.017×0.8
<p>Emily has the following cards</p> <div style="display: flex; justify-content: space-around;"> <div style="border: 1px solid black; border-radius: 50%; padding: 2px 10px;">-1</div> <div style="border: 1px solid black; border-radius: 50%; padding: 2px 10px;">-4</div> <div style="border: 1px solid black; border-radius: 50%; padding: 2px 10px;">2</div> <div style="border: 1px solid black; border-radius: 50%; padding: 2px 10px;">-6</div> <div style="border: 1px solid black; border-radius: 50%; padding: 2px 10px;">4</div> <div style="border: 1px solid black; border-radius: 50%; padding: 2px 10px;">5</div> </div> <p>Emily is going to choose two cards and multiply the numbers on them.</p>	<p>What cards should Emily choose to make the largest possible answer?</p> <div style="display: flex; justify-content: space-around; align-items: center;"> <input style="width: 40px; height: 40px; border: 1px solid black;" type="text"/> × <input style="width: 40px; height: 40px; border: 1px solid black;" type="text"/> </div>
	<p>Find x.</p>
<p>Trains to Portadown leave a train station every 14 minutes. Trains to Portrush leave a train station every 20 minutes A train to Portadown and a train to Portrush both leave the train station at 8am.</p>	<p>When will a train to Portadown and a train to Portrush both leave the train station at the same time?</p>

23rd July	 Corbettmaths
<div style="border: 1px solid black; border-radius: 50%; padding: 10px; display: inline-block;"> 0.64 is less than $\frac{13}{20}$ </div>  <p>Is Sophia correct? Explain your answer.</p>	
<p>Work out</p> $0.447 \div 3$	<p>Work out</p> 0.017×0.8
<p>Emily has the following cards</p> <div style="display: flex; justify-content: space-around;"> <div style="border: 1px solid black; border-radius: 50%; padding: 2px 10px;">-1</div> <div style="border: 1px solid black; border-radius: 50%; padding: 2px 10px;">-4</div> <div style="border: 1px solid black; border-radius: 50%; padding: 2px 10px;">2</div> <div style="border: 1px solid black; border-radius: 50%; padding: 2px 10px;">-6</div> <div style="border: 1px solid black; border-radius: 50%; padding: 2px 10px;">4</div> <div style="border: 1px solid black; border-radius: 50%; padding: 2px 10px;">5</div> </div> <p>Emily is going to choose two cards and multiply the numbers on them.</p>	<p>What cards should Emily choose to make the largest possible answer?</p> <div style="display: flex; justify-content: space-around; align-items: center;"> <input style="width: 40px; height: 40px; border: 1px solid black;" type="text"/> × <input style="width: 40px; height: 40px; border: 1px solid black;" type="text"/> </div>
	<p>Find x.</p>
<p>Trains to Portadown leave a train station every 14 minutes. Trains to Portrush leave a train station every 20 minutes A train to Portadown and a train to Portrush both leave the train station at 8am.</p>	<p>When will a train to Portadown and a train to Portrush both leave the train station at the same time?</p>