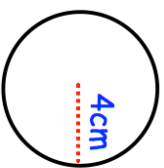


24th July




## Find the circumference

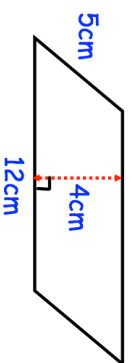


Shown below is a rectangle.

Find the perimeter of the rectangle.



Find the area of the parallelogram



James has 5 cards, each with a number written on it.

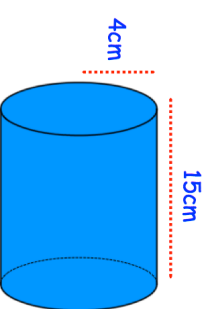
Write down a possible set of numbers James could have.

The median is 9  
The mode is 12  
The range is 7





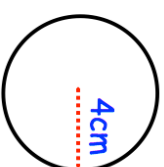

Calculate the volume



24th July




## Find the circumference

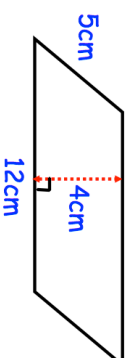


Shown below is a rectangle.

Find the perimeter of the rectangle.



Find the area of the parallelogram



James has 5 cards, each with a number written on it.

Write down a possible set of numbers James could have.

The median is 9  
The mode is 12  
The range is 7






Calculate the volume

