
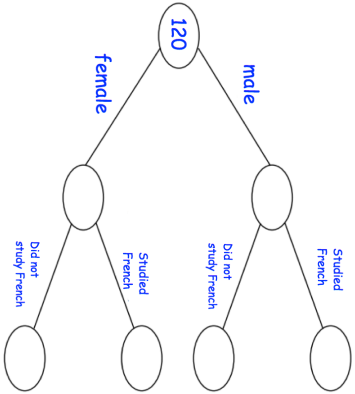
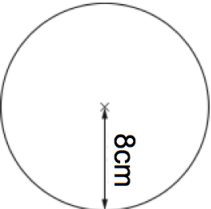

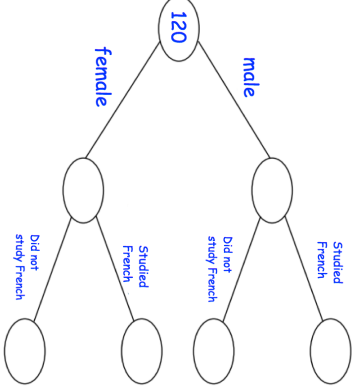


31st July	Corbettmaths 	$\frac{7}{10} - \frac{2}{3}$	$\frac{2}{9} \div \frac{5}{6}$
		<p>There are 120 students in year 11.</p> <p>55 of the students are female 27 of the male students studied French 18 of the female students did not study French</p> <p>Complete the frequency tree</p>	
Small bag Contents 3 doughnuts £1.08	Large bag Contents 5 doughnuts £1.70	Which is the better value for money?	
Calculate the area of this circle			

31st July	Corbettmaths 	$\frac{7}{10} - \frac{2}{3}$	$\frac{2}{9} \div \frac{5}{6}$
		<p>There are 120 students in year 11.</p> <p>55 of the students are female 27 of the male students studied French 18 of the female students did not study French</p> <p>Complete the frequency tree</p>	
Small bag Contents 3 doughnuts £1.08	Large bag Contents 5 doughnuts £1.70	Which is the better value for money?	
Calculate the area of this circle		