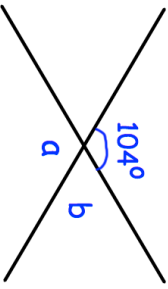
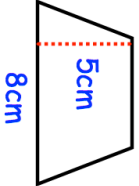
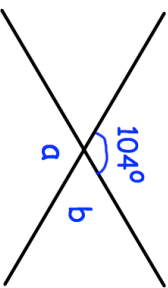
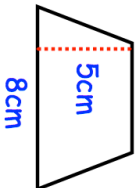


<p><b>4th July</b></p> 	<p>Work out the size of angles a and b</p>
<p>A lorry travels 100 miles at an average speed of 25 mph.</p> <p>Work out how long the journey lasts.</p>	
<p>Hannah is measuring an obtuse angle in her maths exam. She has written the answer <math>32^\circ</math></p> <p>Her teacher has said she has looked at the outside number instead of the inside number on the protractor.</p>	<p>What angle should Hannah have put on her exam?</p>
<p>Jam is made from sugar and strawberries in the ratio 3:5.</p> <p>A jar contains 150g of sugar.</p>	<p>How many grams of strawberries are in the jar?</p> <p>How many grams of jam are in the jar?</p>
<p>4cm</p>  <p>5cm</p> <p>8cm</p>	<p>Calculate the area of the trapezium</p>

<p><b>4th July</b></p> 	<p>Work out the size of angles a and b</p>
<p>A lorry travels 100 miles at an average speed of 25 mph.</p> <p>Work out how long the journey lasts.</p>	
<p>Hannah is measuring an obtuse angle in her maths exam. She has written the answer <math>32^\circ</math></p> <p>Her teacher has said she has looked at the outside number instead of the inside number on the protractor.</p>	<p>What angle should Hannah have put on her exam?</p>
<p>Jam is made from sugar and strawberries in the ratio 3:5.</p> <p>A jar contains 150g of sugar.</p>	<p>How many grams of strawberries are in the jar?</p> <p>How many grams of jam are in the jar?</p>
<p>4cm</p>  <p>5cm</p> <p>8cm</p>	<p>Calculate the area of the trapezium</p>