
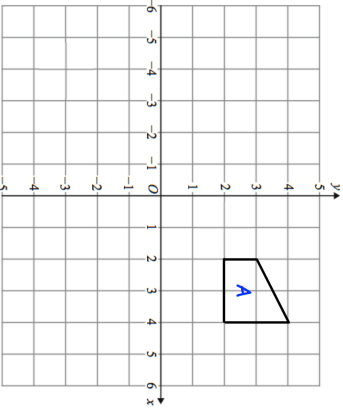
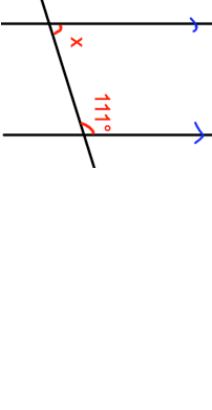

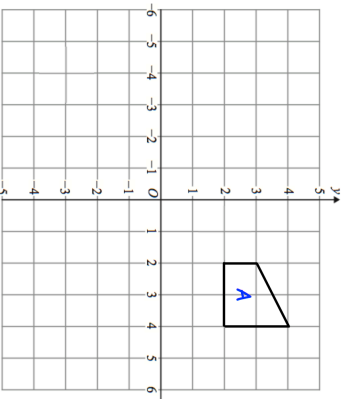
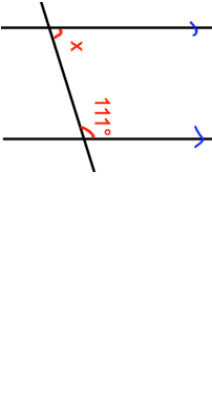


7th July	 Corbettmaths
Connor's watch is two minutes fast. Jo's watch is nine minutes slow. What time is shown on Jo's watch when Connor's watch shows 20:03?	
Here is a rule for continuing a sequence. <div style="border: 1px solid black; padding: 5px; display: inline-block;"> Add 4 then Multiply by 2 </div> The second term of this sequence is 20.	What is the first term?
	Reflect shape A in the y-axis Rotate shape A, 90 degrees clockwise about the origin.
	Find the size of angle x.

7th July	 Corbettmaths
Connor's watch is two minutes fast. Jo's watch is nine minutes slow. What time is shown on Jo's watch when Connor's watch shows 20:03?	
Here is a rule for continuing a sequence. <div style="border: 1px solid black; padding: 5px; display: inline-block;"> Add 4 then Multiply by 2 </div> The second term of this sequence is 20.	What is the first term?
	Reflect shape A in the y-axis Rotate shape A, 90 degrees clockwise about the origin.
	Find the size of angle x.