
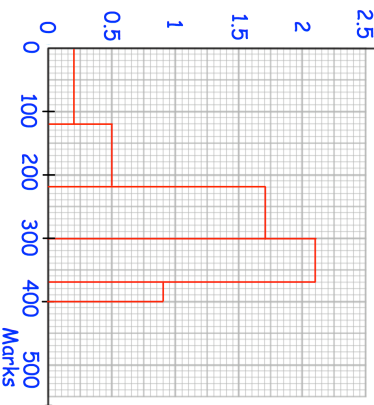

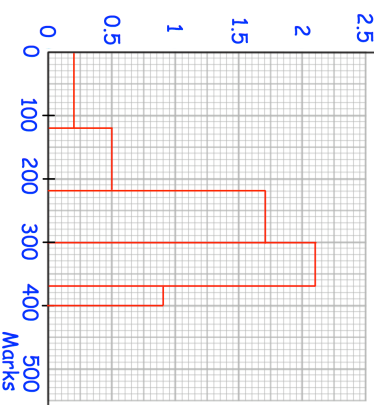


13th July	Corbettmaths 
Simplify $\frac{x^3 - x}{x + 2} \div \frac{x^2 - x}{x^2 - 5x - 14}$	
Express $\left(\frac{1}{\sqrt{5}}\right)^5$ in the form $\frac{\sqrt{a}}{b}$	
Given that $x^2 : (x + 6) = 1 : 2$ Find the possible values of x	
	<p>Miss Kelly wants to draw a pie chart to represent the grades obtained by the students.</p> <p>If a student scored 350 marks or higher, they obtained a grade 9.</p> <p>What size should the angle of the sector for grade 9 be in her pie chart?</p>

13th July	Corbettmaths 
Simplify $\frac{x^3 - x}{x + 2} \div \frac{x^2 - x}{x^2 - 5x - 14}$	
Express $\left(\frac{1}{\sqrt{5}}\right)^5$ in the form $\frac{\sqrt{a}}{b}$	
Given that $x^2 : (x + 6) = 1 : 2$ Find the possible values of x	
	<p>Miss Kelly wants to draw a pie chart to represent the grades obtained by the students.</p> <p>If a student scored 350 marks or higher, they obtained a grade 9.</p> <p>What size should the angle of the sector for grade 9 be in her pie chart?</p>