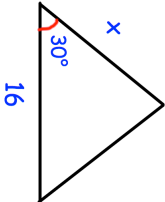
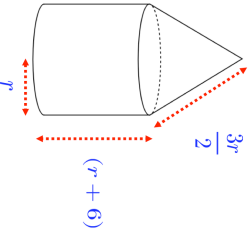
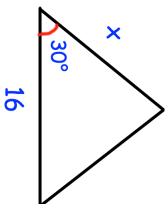
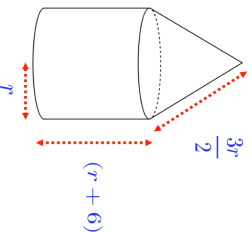


<p>4th July</p> 	<p>Corbettmaths</p> <p>Find the area of the triangle in terms of x.</p>
<p>Prove the sum of the squares of any two consecutive even numbers is always a multiple of 4.</p>	
<p>Make q the subject of</p> $\frac{p}{qr} = 2 + \frac{1}{r}$	
<p>A cone and cylinder are joined to make a solid</p>  <p>Show the total surface area of the solid is $\frac{3\pi r}{2}(3r + 8)$</p>	

<p>4th July</p> 	<p>Corbettmaths</p> <p>Find the area of the triangle in terms of x.</p>
<p>Prove the sum of the squares of any two consecutive even numbers is always a multiple of 4.</p>	
<p>Make q the subject of</p> $\frac{p}{qr} = 2 + \frac{1}{r}$	
<p>A cone and cylinder are joined to make a solid</p>  <p>Show the total surface area of the solid is $\frac{3\pi r}{2}(3r + 8)$</p>	