
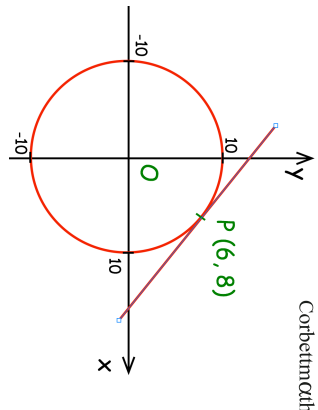

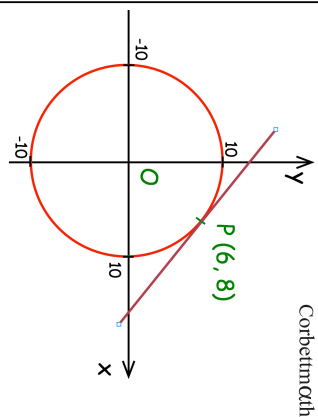


8th July	
<p>Here is a circle, centre O, and the tangent to the circle at the point (6, 8). Find the equation of the tangent at the point P.</p>	
<p>Ethan has 12 coins. There are three 10p coins and nine 20p coins. Ethan chooses 3 coins at random. Work out the probability that he takes exactly 50p.</p>	
<p>Solve $3^{4x} = 27^{5-x}$</p>	
<p>Find the nth term for the sequence 0 9 20 33 48</p>	

8th July	
<p>Here is a circle, centre O, and the tangent to the circle at the point (6, 8). Find the equation of the tangent at the point P.</p>	
<p>Ethan has 12 coins. There are three 10p coins and nine 20p coins. Ethan chooses 3 coins at random. Work out the probability that he takes exactly 50p.</p>	
<p>Solve $3^{4x} = 27^{5-x}$</p>	
<p>Find the nth term for the sequence 0 9 20 33 48</p>	