
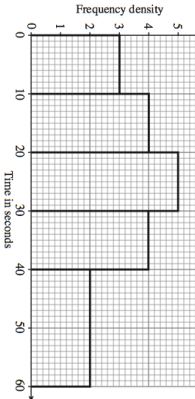
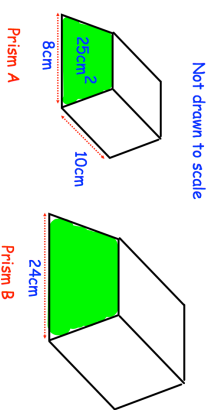

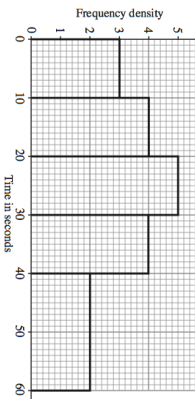
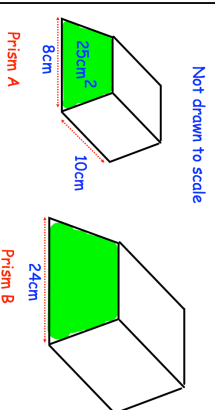


21st July	Write 0.3434343434... as a fraction	 Corbettmaths
<p>A group of students complete a puzzle. Work out how many students took part?</p>		
<p>A number is increased by 30% and then decreased by 25%. What is the overall percentage change?</p>		
<p>A plant is 30cm tall when planted in a garden. It grows by 10% a week. How long will it take to reach 1m tall?</p>		
<p>Not drawn to scale</p> 	<p>Prism A has a cross-sectional area of 25cm^2 Work out the volume of prism B.</p>	

21st July	Write 0.3434343434... as a fraction	 Corbettmaths
<p>A group of students complete a puzzle. Work out how many students took part?</p>		
<p>A number is increased by 30% and then decreased by 25%. What is the overall percentage change?</p>		
<p>A plant is 30cm tall when planted in a garden. It grows by 10% a week. How long will it take to reach 1m tall?</p>		
<p>Not drawn to scale</p> 	<p>Prism A has a cross-sectional area of 25cm^2 Work out the volume of prism B.</p>	