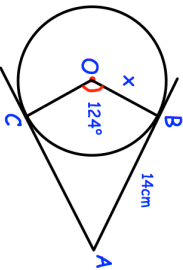
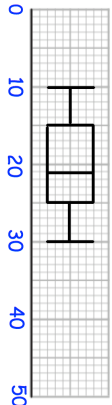
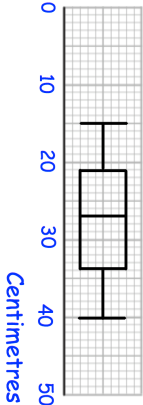
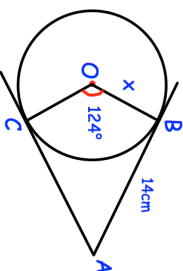
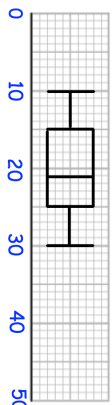
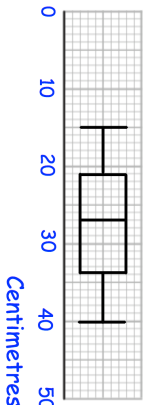


<p>23rd July</p> <p>$(4.2 \times 10^3) \times (3 \times 10^5)$</p> <p>$2 \times 10^{11}$</p>	<p>Corbettmaths</p>
<p>$(1, 10)$</p> <p>$A \times$</p> <p>$B \times (5, 1)$</p>	<p>Find the equation of the straight line that would pass through AB.</p>
	<p>Find x</p>
<p>Length of red squirrels</p>  <p>Centimetres</p>	<p>Shown are the lengths of red and grey squirrels.</p>
<p>Length of grey squirrels</p>  <p>Centimetres</p>	<p>Compare the distributions.</p>

<p>23rd July</p> <p>$(4.2 \times 10^3) \times (3 \times 10^5)$</p> <p>$2 \times 10^{11}$</p>	<p>Corbettmaths</p>
<p>$(1, 10)$</p> <p>$A \times$</p> <p>$B \times (5, 1)$</p>	<p>Find the equation of the straight line that would pass through AB.</p>
	<p>Find x</p>
<p>Length of red squirrels</p>  <p>Centimetres</p>	<p>Shown are the lengths of red and grey squirrels.</p>
<p>Length of grey squirrels</p>  <p>Centimetres</p>	<p>Compare the distributions.</p>