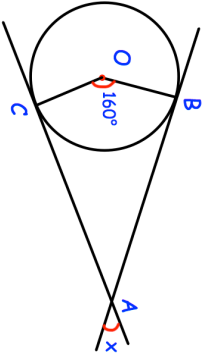
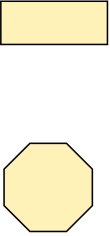
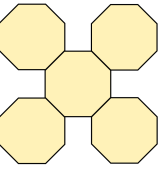
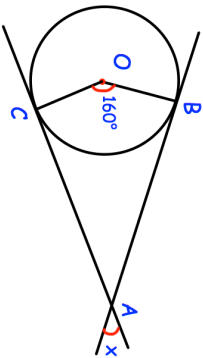
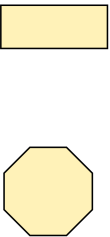
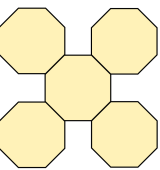


<p>29th July</p> 	<p>AB and AC are tangents. Find x.</p> <p style="text-align: right;"><small>Corbettmaths</small></p>
<p>Simplify</p> $\frac{x^2 + 3x - 4}{x^2 - 8x + 7}$	
<p>Here is a rectangle and a regular octagon.</p>  <p>The length of the rectangle is 12cm longer than the width of the rectangle. The perimeter of the rectangle is equal to the perimeter of the octagon. 5 of the regular octagons are used to make a shape.</p>	 <p>The perimeter of this shape is 132cm Work out the area of the rectangle</p>
<p>Simplify</p> $2\sqrt{3} \times 3\sqrt{300}$	

<p>29th July</p> 	<p>AB and AC are tangents. Find x.</p> <p style="text-align: right;"><small>Corbettmaths</small></p>
<p>Simplify</p> $\frac{x^2 + 3x - 4}{x^2 - 8x + 7}$	
<p>Here is a rectangle and a regular octagon.</p>  <p>The length of the rectangle is 12cm longer than the width of the rectangle. The perimeter of the rectangle is equal to the perimeter of the octagon. 5 of the regular octagons are used to make a shape.</p>	 <p>The perimeter of this shape is 132cm Work out the area of the rectangle</p>
<p>Simplify</p> $2\sqrt{3} \times 3\sqrt{300}$	