
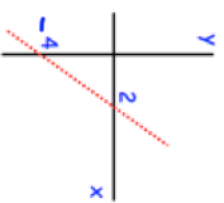
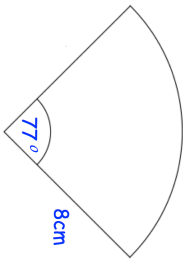

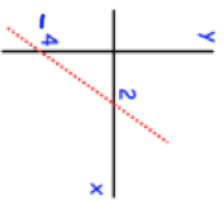
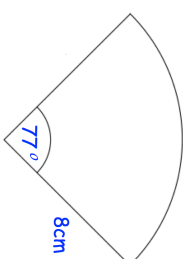


5th July	What is the probability of rolling a six, three times in a row on an ordinary dice?	 Corbettmaths			
	Find the equation of the red line.	Find the area of the sector			
	<table border="1"> <tr> <td data-bbox="574 145 638 280"> Plank A Volume = 750cm^3 Mass = 900g </td> <td data-bbox="574 291 638 425"> Plank B Volume = 0.0152m^3 Mass = 7.6kg </td> <td data-bbox="574 436 638 537"> Plank C Volume = 1000cm^3 Mass = 1.02kg </td> </tr> </table>	Plank A Volume = 750cm^3 Mass = 900g	Plank B Volume = 0.0152m^3 Mass = 7.6kg	Plank C Volume = 1000cm^3 Mass = 1.02kg	
Plank A Volume = 750cm^3 Mass = 900g	Plank B Volume = 0.0152m^3 Mass = 7.6kg	Plank C Volume = 1000cm^3 Mass = 1.02kg			
<p>Mr. Dixon is building a toy boat for his son. He has three different planks of wood to choose from.</p> <p>If wood has a density under 1g/cm^3, it will float.</p> <p>Which plank of wood is the most suitable?</p> <p>Explain your answer.</p>					

5th July	What is the probability of rolling a six, three times in a row on an ordinary dice?	 Corbettmaths			
	Find the equation of the red line.	Find the area of the sector			
	<table border="1"> <tr> <td data-bbox="574 1243 638 1377"> Plank A Volume = 750cm^3 Mass = 900g </td> <td data-bbox="574 1388 638 1523"> Plank B Volume = 0.0152m^3 Mass = 7.6kg </td> <td data-bbox="574 1534 638 1635"> Plank C Volume = 1000cm^3 Mass = 1.02kg </td> </tr> </table>	Plank A Volume = 750cm^3 Mass = 900g	Plank B Volume = 0.0152m^3 Mass = 7.6kg	Plank C Volume = 1000cm^3 Mass = 1.02kg	
Plank A Volume = 750cm^3 Mass = 900g	Plank B Volume = 0.0152m^3 Mass = 7.6kg	Plank C Volume = 1000cm^3 Mass = 1.02kg			
<p>Mr. Dixon is building a toy boat for his son. He has three different planks of wood to choose from.</p> <p>If wood has a density under 1g/cm^3, it will float.</p> <p>Which plank of wood is the most suitable?</p> <p>Explain your answer.</p>					