
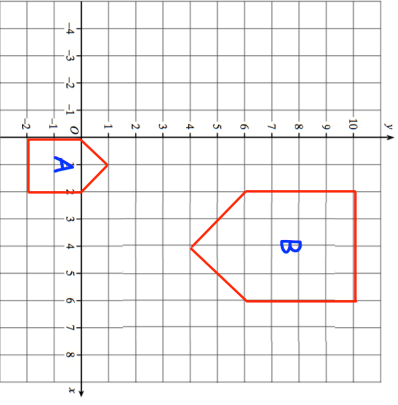

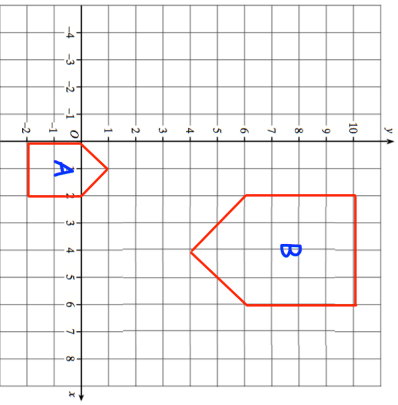


<b>7th July</b> Simplify fully $\frac{x^2 - 4}{2x^2 - x - 6}$	 Corbettmaths
A varies indirectly to $C^3$ . When $A = 4$ , $C = 2$ . Find A when $C = 3$ .	Find C when $A = 10$ .
	Describe fully the single transformation that maps shape A onto shape B.
The line passing through $(1, p)$ and $(5, 1)$ has a gradient of $\frac{3}{4}$ . Find the value of $p$ .	

<b>7th July</b> Simplify fully $\frac{x^2 - 4}{2x^2 - x - 6}$	 Corbettmaths
A varies indirectly to $C^3$ . When $A = 4$ , $C = 2$ . Find A when $C = 3$ .	Find C when $A = 10$ .
	Describe fully the single transformation that maps shape A onto shape B.
The line passing through $(1, p)$ and $(5, 1)$ has a gradient of $\frac{3}{4}$ . Find the value of $p$ .	