



Name: \_\_\_\_\_

5-a-day

Numeracy



Corbettmaths

| 22nd July  |                                   |
|--|-----------------------------------|
|  <br>Michael has 12 five pence pieces and 12 twenty pence pieces | How much money does Michael have? |
| A bag of carrots costs 59p<br>Terry buys 29 bags of carrots.<br>How much do the bags of carrots cost?  |                                   |
| He pays for the carrots with a £20 note.<br>How much change does Terry get?  |                                   |
| List the common multiples of 3 and 4 that are under 40.  |                                   |
| Gemma is a car saleswoman. She is paid £350 per week and £120 for every car she sells.<br>In one week, she sells 4 cars.<br>How much is she paid that week?  |                                   |



Name: \_\_\_\_\_

5-a-day

Numeracy



Corbettmaths

| 22nd July  |                                   |
|--|-----------------------------------|
|  <br>Michael has 12 five pence pieces and 12 twenty pence pieces | How much money does Michael have? |
| A bag of carrots costs 59p<br>Terry buys 29 bags of carrots.<br>How much do the bags of carrots cost?  |                                   |
| He pays for the carrots with a £20 note.<br>How much change does Terry get?  |                                   |
| List the common multiples of 3 and 4 that are under 40.  |                                   |
| Gemma is a car saleswoman. She is paid £350 per week and £120 for every car she sells.<br>In one week, she sells 4 cars.<br>How much is she paid that week?  |                                   |